



Please write clearly in block capitals.

Centre number

--	--	--	--	--

Candidate number

--	--	--	--

Surname

Forename(s)

Candidate signature

I declare this is my own work.

A-level FURTHER MATHEMATICS

Paper 3 Discrete

Time allowed: 2 hours

Materials

- You must have the AQA Formulae and statistical tables booklet for A-level Mathematics and A-level Further Mathematics.
- You should have a scientific calculator that meets the requirements of the specification.
- You must ensure you have the other optional Question Paper/Answer Book for which you are entered (**either** Mechanics **or** Statistics). You will have 2 hours to complete **both** papers.

Instructions

- Use black ink or black ball-point pen. Pencil should only be used for drawing.
- Fill in the boxes at the top of this page.
- Answer **all** questions.
- You must answer each question in the space provided for that question. If you require extra space for your answer(s), use the lined pages at the end of this book. Write the question number against your answer(s).
- Do **not** write outside the box around each page or on blank pages.
- Show all necessary working; otherwise marks for method may be lost.
- Do all rough work in this book. Cross through any work that you do not want to be marked.

Information

- The marks for questions are shown in brackets.
- The maximum mark for this paper is 50.

Advice

- Unless stated otherwise, you may quote formulae, without proof, from the booklet.
- You do not necessarily need to use all the space provided.

For Examiner's Use	
Question	Mark
1	
2	
3	
4	
5	
6	
7	
8	
9	
10	
TOTAL	



J U N 2 2 7 3 6 7 3 D 0 1

PB/Jun22/E4

7367/3D

There are no questions printed on this page

*Do not write
outside the
box*

**DO NOT WRITE ON THIS PAGE
ANSWER IN THE SPACES PROVIDED**



0 2

Answer **all** questions in the spaces provided.

1 The graph G has a subgraph isomorphic to K_5 , the complete graph with 5 vertices.

Which of the following statements about G must be true?

Tick (✓) **one** box.

[1 mark]

G is not connected

G is not Hamiltonian

G is not planar

G is not simple

2 Graph A is a connected planar graph with 12 vertices, 18 edges and n faces.

Find the value of n

Circle your answer.

[1 mark]

4

8

28

32

Turn over for the next question

Turn over ►



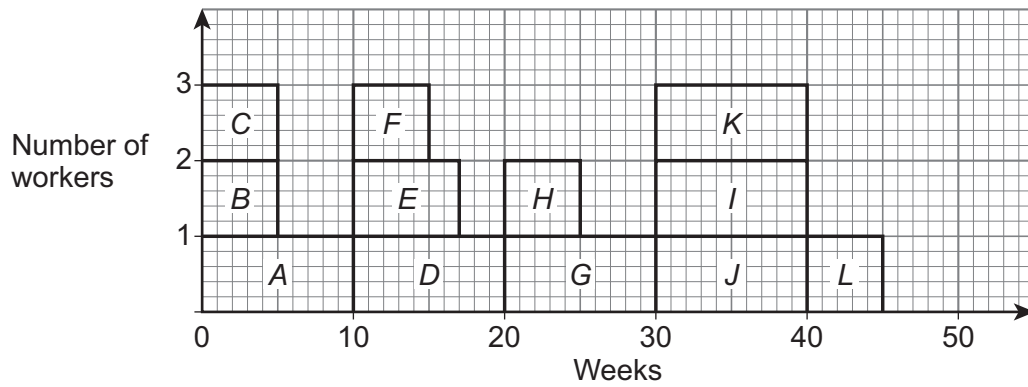
3 A company undertakes a project which consists of 12 activities, A, B, C, \dots, L

Each activity requires one worker.

The resource histogram below shows the duration of each activity.

Each activity begins at its earliest start time.

The path $ADGJL$ is critical.



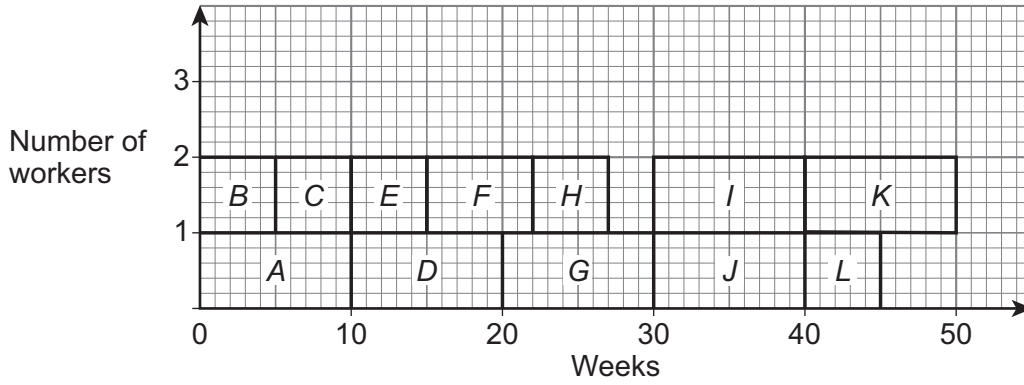
The company only has two workers available to work on the project.

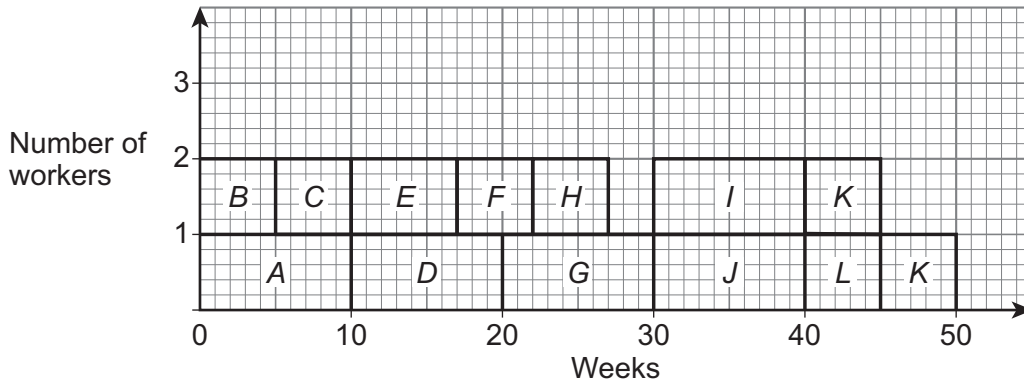


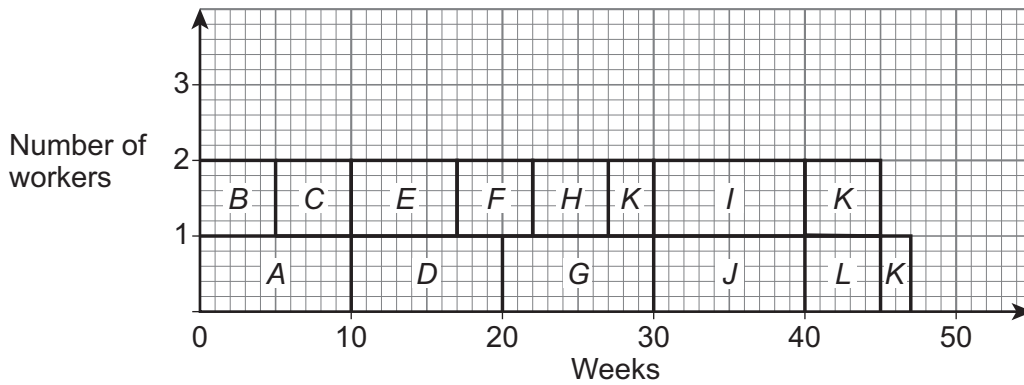
Which of the following could be a correctly levelled histogram?

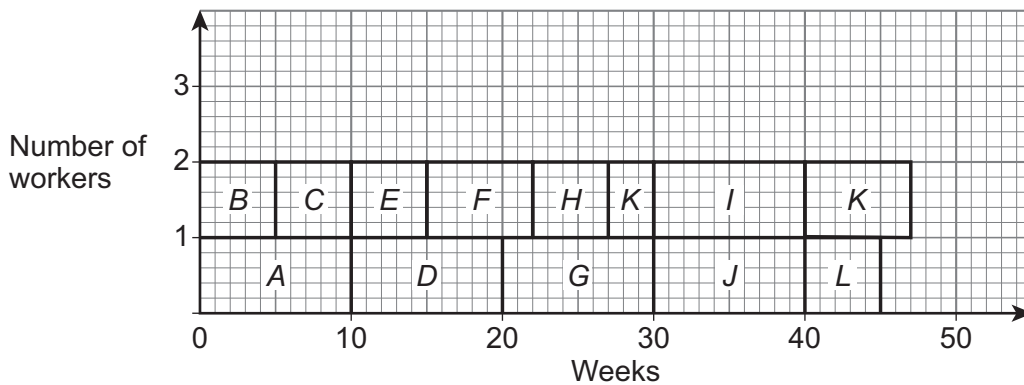
Tick (✓) **one** box.

[1 mark]









Turn over ►



4 Ben and Jadzia play a zero-sum game.

The game is represented by the following pay-off matrix for Ben.

		Jadzia		
		X	Y	Z
Ben	A	-3	2	3
	B	6	0	-4
	C	7	-1	1
	D	6	-2	1

4 (a) State, with a reason, which strategy Ben should never play.

[1 mark]

4 (b) Determine whether or not the game has a stable solution.

Fully justify your answer.

[3 marks]



4 (c) Ben knows that Jadzia will always play her play-safe strategy.

Explain how Ben can maximise his expected pay-off.

[2 marks]

Turn over for the next question

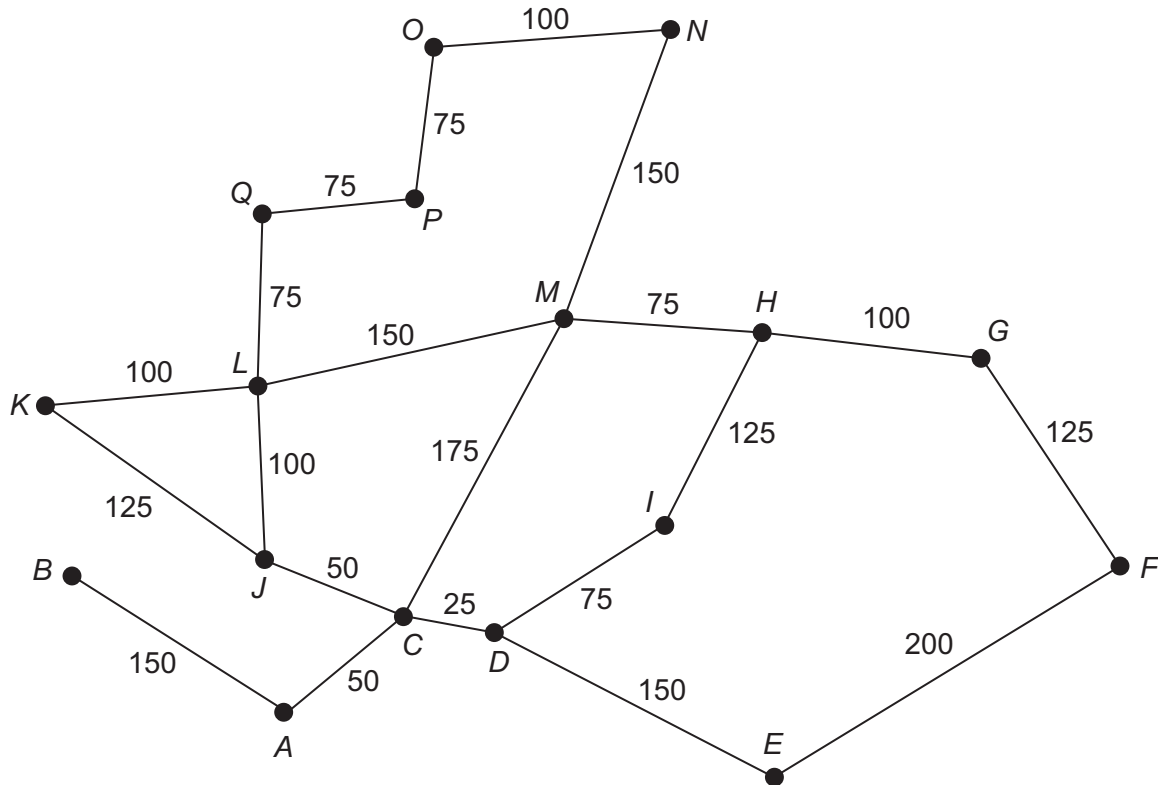
Turn over ►



5 A council wants to convert all of the street lighting in a village to use LED lighting.

The network below shows each street in the village. Each node represents a junction and the weight of each arc represents the length, in metres, of the street.

The street lights are only positioned on one side of each street in the village.



The total length of all of the streets in the village is 2250 metres.

In order to determine the total number of street lights in the village, a council worker is required to walk along every street in the village at least once, starting and finishing at the same junction.

The shortest possible distance the council worker can walk in order to determine the total number of street lights in the village is x metres.

5 (a) Find the value of x

Fully justify your answer.

[4 marks]



Do not write
outside the
box

5 (b) A new council regulation requires that the mean distance along a street between adjacent LED street lights in a village be less than 25 metres.

The council worker counted 91 different street lights on their journey around the village.

Determine whether or not the village will meet the new council regulation.

[2 marks]

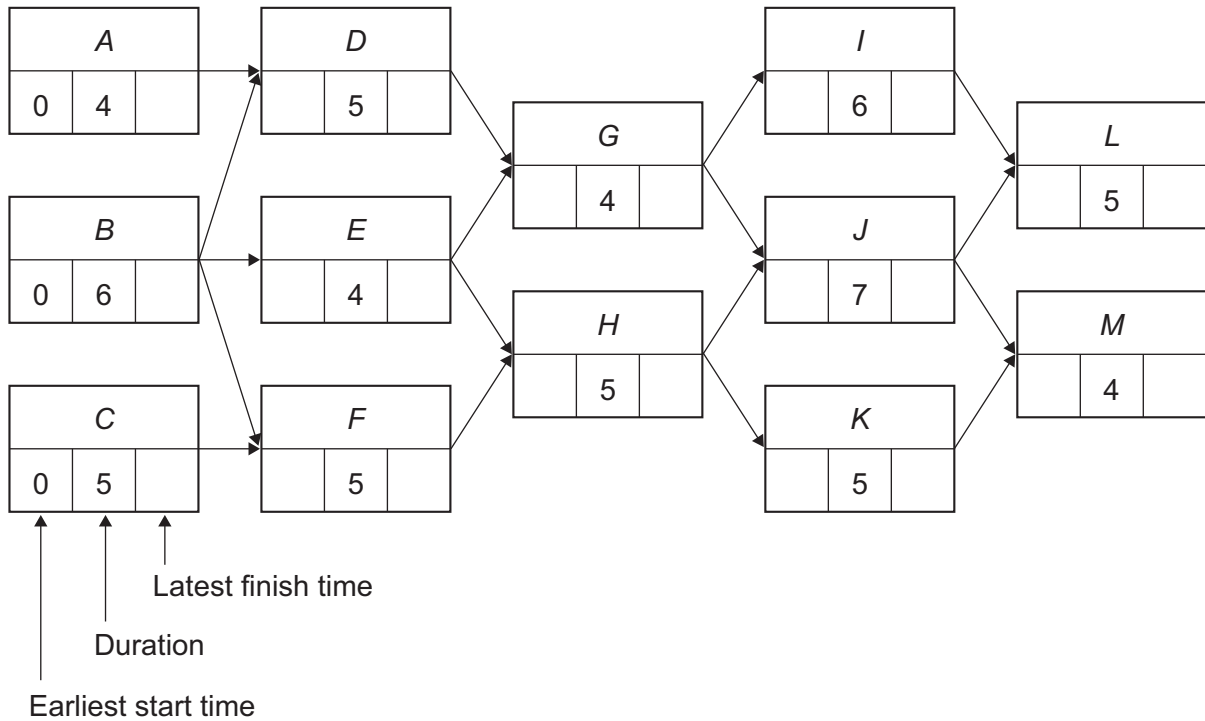
Turn over for the next question

Turn over ►



6 Bill Durrh Ltd undertake a construction project.

The activity network for the project is shown below. The duration of each activity is given in weeks.



6 (a) (i) Find the earliest start time and the latest finish time for each activity and show these values on the activity network above.

[3 marks]

6 (a) (ii) Identify all of the critical activities.

[1 mark]



6 (b) The manager of Bill Durrh Ltd recruits some additional temporary workers in order to reduce the duration of one activity by 2 weeks.

The manager wants to reduce the minimum completion time of the project by the largest amount.

State, with a reason, which activity the manager should choose.

[2 marks]

Turn over for the next question

Turn over ►



7 The group G has binary operation $*$ and order p , where p is a prime number.

7 (a) Determine the number of distinct subgroups of G

Fully justify your answer.

[2 marks]

7 (b) G contains an element g which has period p

7 (b) (i) State the general name given to elements such as g

[1 mark]

7 (b) (ii) State the name of a group that is isomorphic to G

[1 mark]

7 (c) G contains an element g^r , where $r < p$

Find, in terms of g , r and p , the inverse of g^r

[2 marks]



7 (d) In the case when $p = 5$ and the binary operation $*$ represents addition modulo 5, G contains the elements 0, 1, 2, 3 and 4

7 (d) (i) Explain why G is closed.

[1 mark]

7 (d) (ii) Complete the Cayley table for $(G, *)$

[1 mark]

$*$					

Turn over for the next question

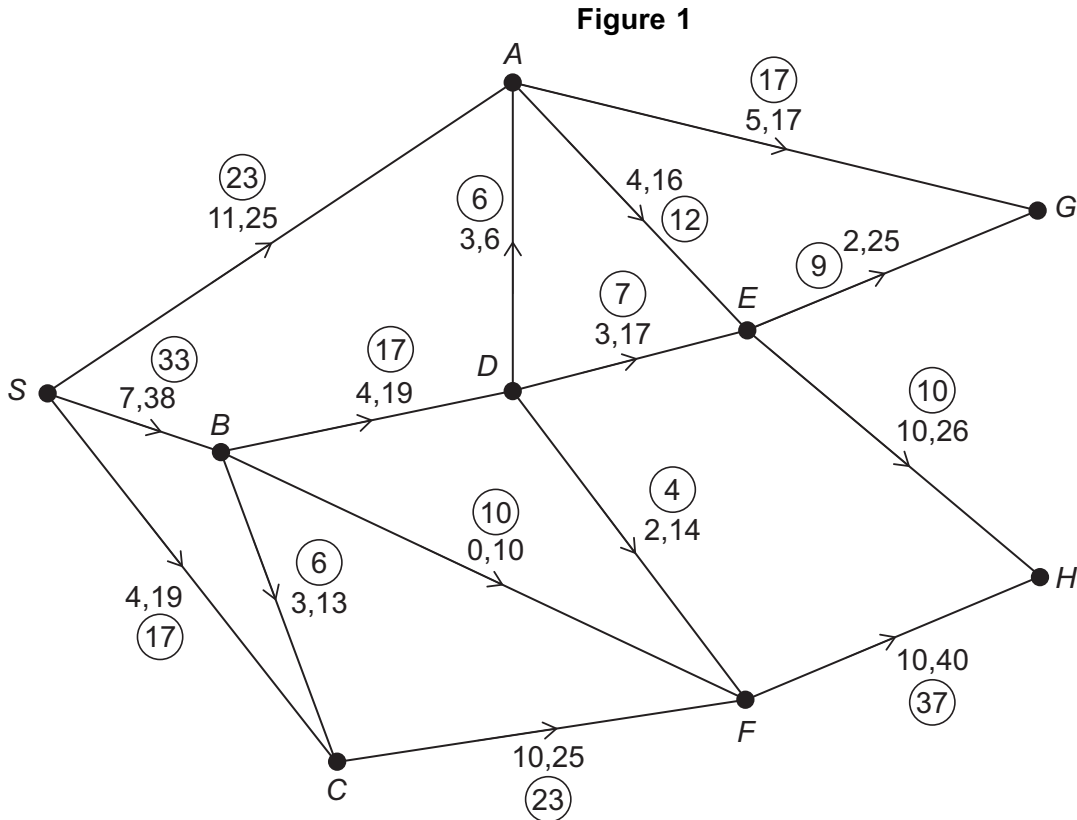
Turn over ►



8 **Figure 1** shows a network of gas pipes.

The numbers on each arc represent the lower and upper capacity for each pipe in $\text{m}^3 \text{s}^{-1}$

The numbers in the circles represent an initial feasible flow of $73 \text{ m}^3 \text{ s}^{-1}$ through the network.



8 (a) On **Figure 1** above, add a supersink T to the network.

[2 marks]

8 (b) Using flow augmentation, find the maximum flow through the network.

You must indicate any flow augmenting paths clearly in the table below.

You may use **Figure 2**, on the page opposite, in your solution.

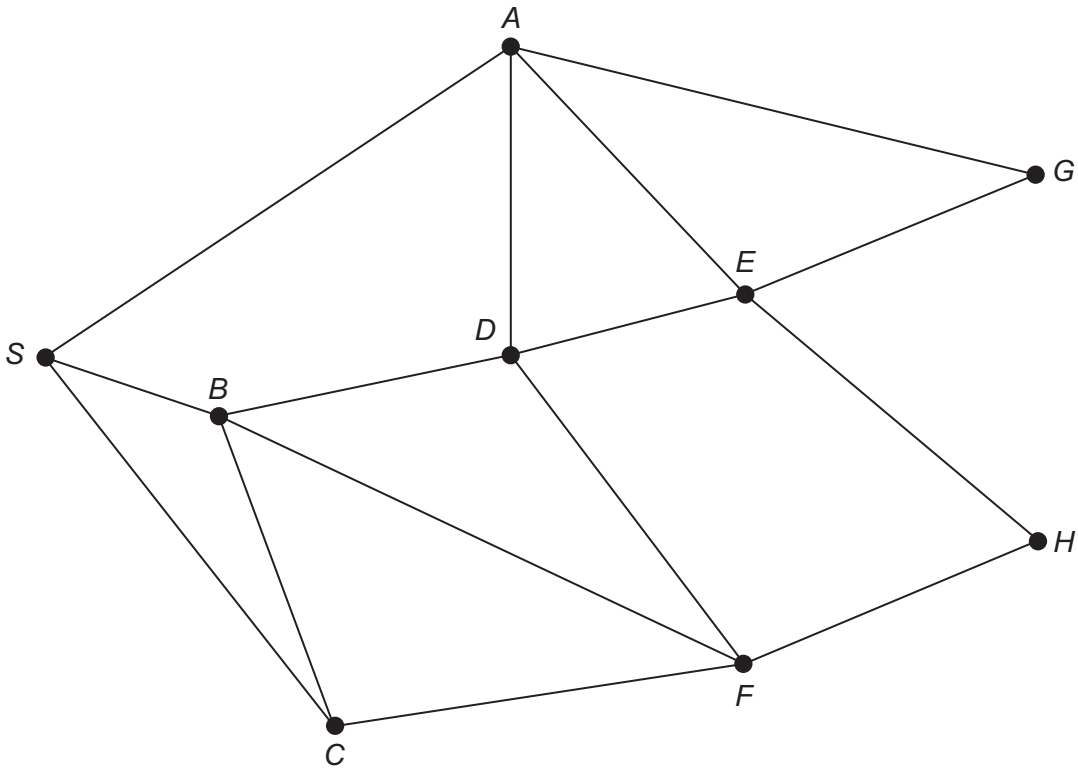
[4 marks]

Augmenting Path	Flow

Maximum flow _____



Figure 2



8 (c) Prove that the flow found in part (b) is the maximum flow through the network. **[2 marks]**

8 (d) A trainee engineer claims that increasing the upper capacity of the pipe AG will increase the maximum flow through the network, as the flow through this pipe cannot currently be increased.

Comment on the validity of the trainee's claim.

[2 marks]

Turn over ►



9 The binary operation \oplus acts on the positive integers x and y such that

$$x \oplus y = x + y + 8 \pmod{k^2 - 16k + 74}$$

where k is a positive integer.

9 (a) (i) Show that \oplus is commutative.

[1 mark]

9 (a) (ii) Determine whether or not \oplus is associative.

Fully justify your answer.

[2 marks]



9 (b) Find the values of k for which 3 is an identity element for the set of positive integers under \oplus

[3 marks]

Turn over for the next question

Turn over ►



10 Kira and Julian play a zero-sum game that does not have a stable solution.

Kira has three strategies to choose from: K_1 , K_2 and K_3

To determine her optimal mixed strategy, Kira begins by defining the following variables:

v = value of the game for Kira

p_1 = probability of Kira playing strategy K_1

p_2 = probability of Kira playing strategy K_2

p_3 = probability of Kira playing strategy K_3

Kira then formulates the following linear programming problem.

$$\begin{array}{ll} \text{Maximise} & v \\ \text{subject to} & 7p_1 + p_2 + 8p_3 \geq v \\ & 3p_1 + 7p_2 + 2p_3 \geq v \\ & 9p_1 + 2p_2 + 4p_3 \geq v \\ \text{and} & p_1 + p_2 + p_3 \leq 1 \\ & p_1, p_2, p_3 \geq 0 \end{array}$$

10 (a) (i) Explain why the condition $p_1 + p_2 + p_3 \leq 1$ is necessary in Kira's linear programming problem.

[1 mark]

10 (a) (ii) Explain why the condition $p_1, p_2, p_3 \geq 0$ is necessary in Kira's linear programming problem.

[1 mark]



10 (b) Julian has three strategies to choose from: J_1 , J_2 and J_3

Complete the following pay-off matrix which represents the game for Kira.

[3 marks]

		Julian		
		J_1	J_2	J_3
Kira	Strategy			
	K_1	7		
	K_2			
	K_3			

END OF QUESTIONS



There are no questions printed on this page

*Do not write
outside the
box*

**DO NOT WRITE ON THIS PAGE
ANSWER IN THE SPACES PROVIDED**



